

Şekil Sayı Eşleştirme

→
= 1

☆
= 7

▽
= 8

◇
= 4

+

△
= 5

□
= 0

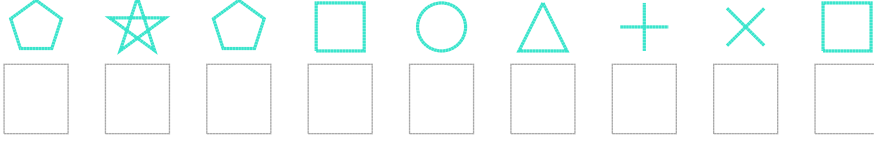
×

⬠
= 2

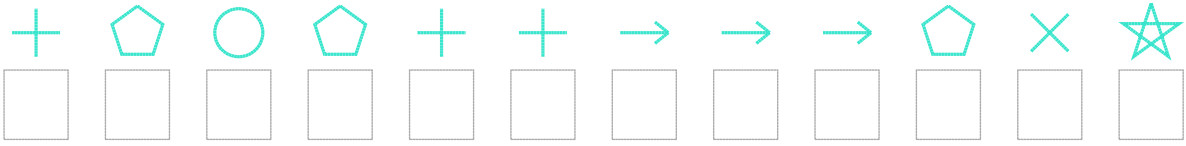
○
= 6

Aşağıdaki uzun şifreleri hatasız çözerek altlarına yazın:

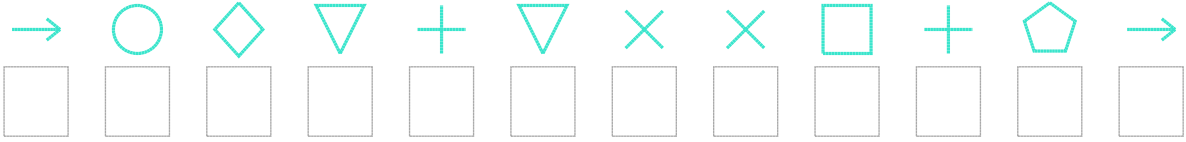
1. Şifre



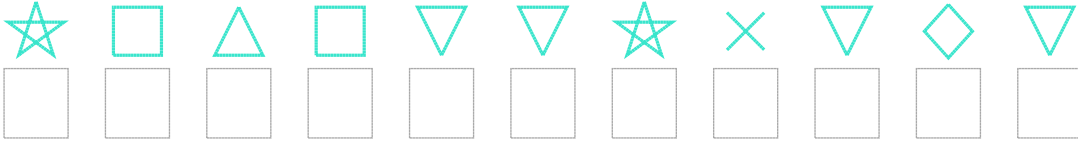
2. Şifre



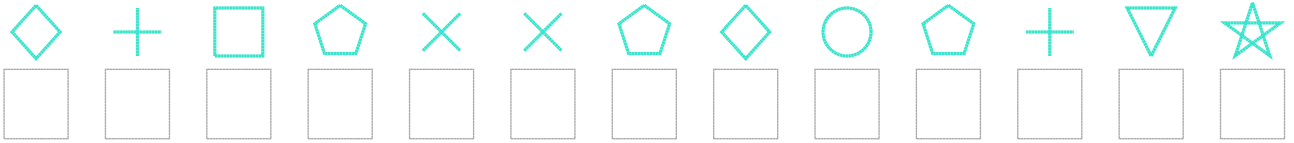
3. Şifre



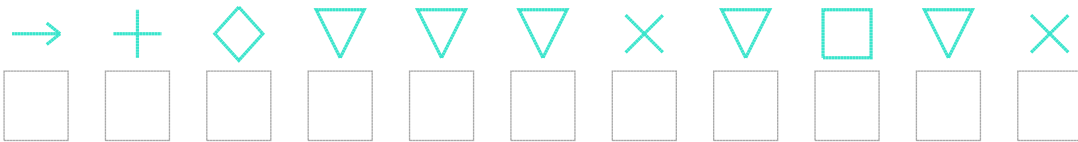
4. Şifre



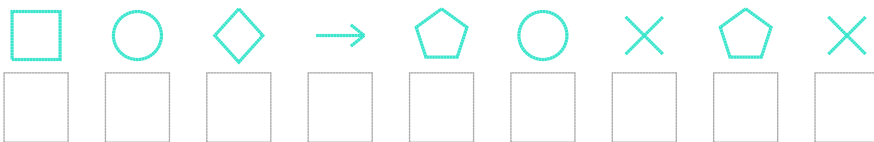
5. Şifre



6. Şifre



7. Şifre



□ BONUS: 3. ve 7. şifrenin ilk rakamının toplamı kaçtır?

Cevap Anahtarı

1. Şifre: 272065930
2. Şifre: 926299111237
3. Şifre: 164898330921
4. Şifre: 70508873848
5. Şifre: 4902332462987
6. Şifre: 19488838083
7. Şifre: 064126323

□ Bonus Soru Cevabı: 1